



Key stage 3 mathematics 2005
Mental mathematics Test C

First name _____

Last name _____

School _____

Total marks

Time: 5 seconds continued

6		°	
7		$\frac{3}{9}$	
8		$3m + m$	

Time: 10 seconds

9	£		50p
10		25	28
11		10:30 am	
12	125,	115,	105,
13			

Practice question

		90	
--	--	----	--

Time: 5 seconds

1			
2			
3		$b = 14 + a$	
4			
5		9300	

14	-1°C	5°C	-3°C	
	2°C	0°C		

15			
	people		

Time: 10 seconds continued

16

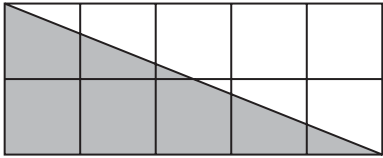
17 £ 80p

18 seconds

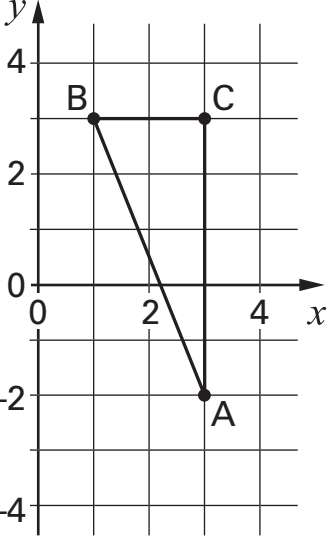
19 2000 992

20 3, 8, 3, 1, 4

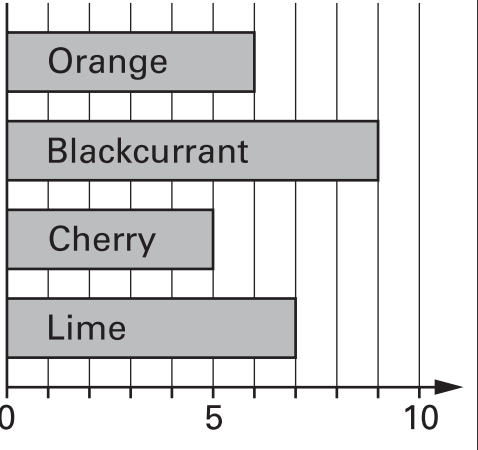
21 °C -2°C

22 
cm²

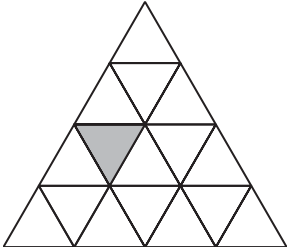
23 £ £60

24 
(,)

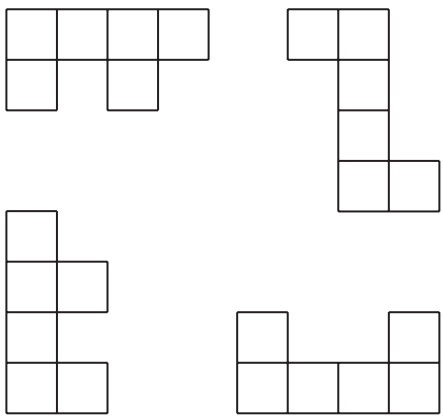
Time: 15 seconds

25 

26 W

27 

28 and

29 

30 25 cards
16 even numbers